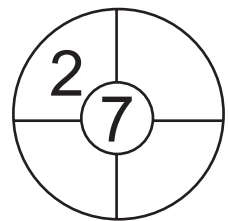
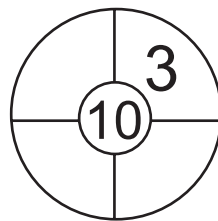
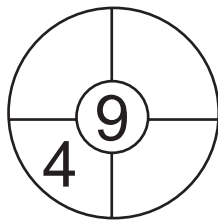
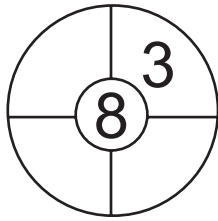
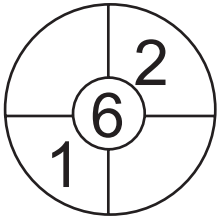
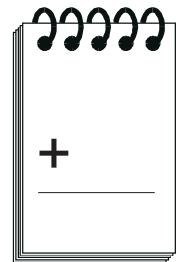



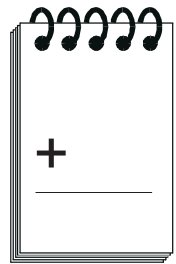
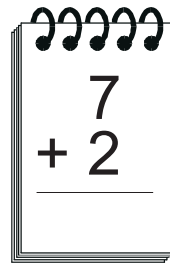
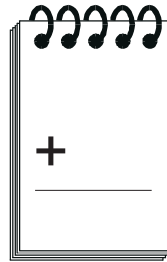
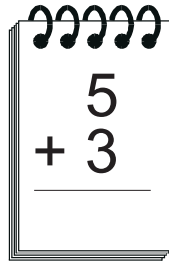
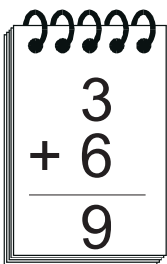
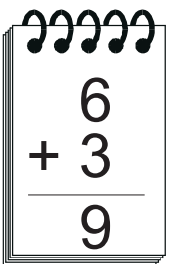


# Μάθημα 18



1) Συμπλήρωσε με αριθμούς όλες τις θέσεις για να γίνουν όλα μαζί όσα γράφει στο κέντρο κάθε ρόδας.



2) Λογάριασε κάθετα και μετά γράψε δίπλα το ζευγαράκι ανάποδα, όπως το παράδειγμα.



3) Βοήθησε κάθε σκυλάκι να βρει το σπίτι του.



Όνομα: \_\_\_\_\_