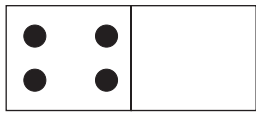
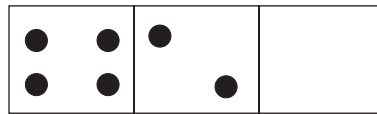


Μάθημα 31

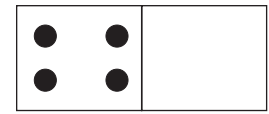
1) Παρατήρησε τα ντόμινο, ζωγράφισε τις τελίτσες που λείπουν και συμπλήρωσε τα ζευγαράκια:




$$4 + \underline{\quad} = 8$$



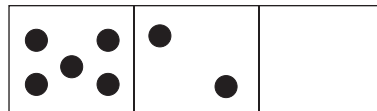
$$4 + 2 + \underline{\quad} = 8$$



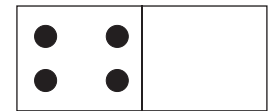
$$4 + \underline{\quad} = 10$$




$$6 + \underline{\quad} = 9$$




$$5 + 2 + \underline{\quad} = 9$$



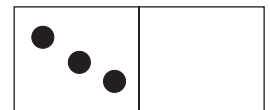
$$6 + \underline{\quad} = 7$$



$$5 + \underline{\quad} = 7$$

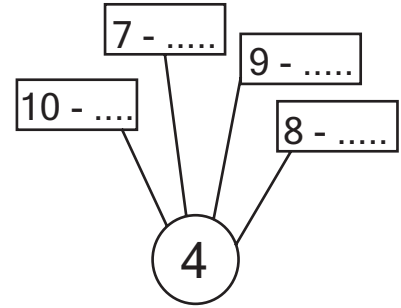
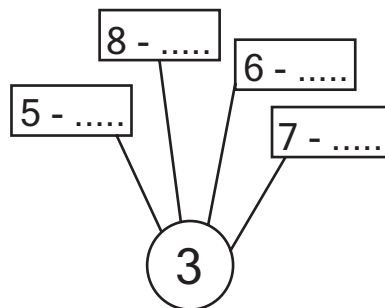
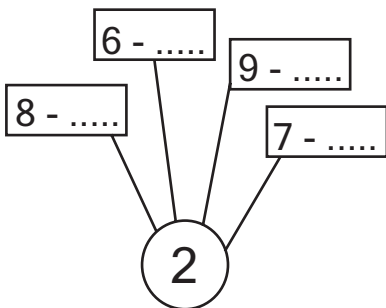


$$3 + 3 + \underline{\quad} = 10$$

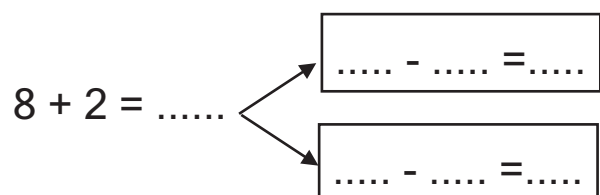
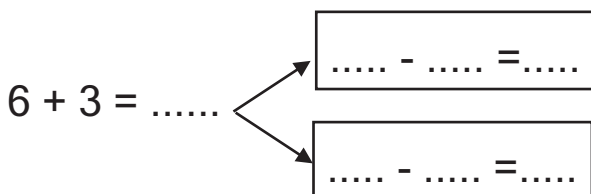
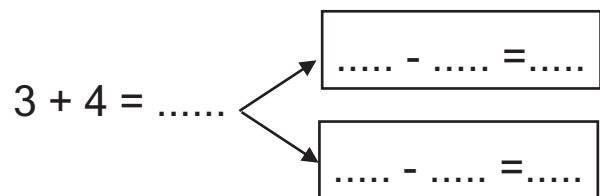
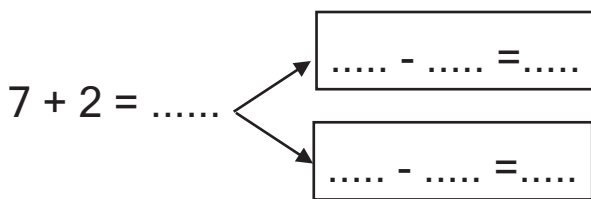


$$3 + \underline{\quad} = 8$$

2) Πόσα θα βγάλεις για να μείνουν όσα λέει σε κάθε κύκλο;



3) Από κάθε πρόσθεση κάνω δύο αφαιρέσεις:



Όνομα: _____