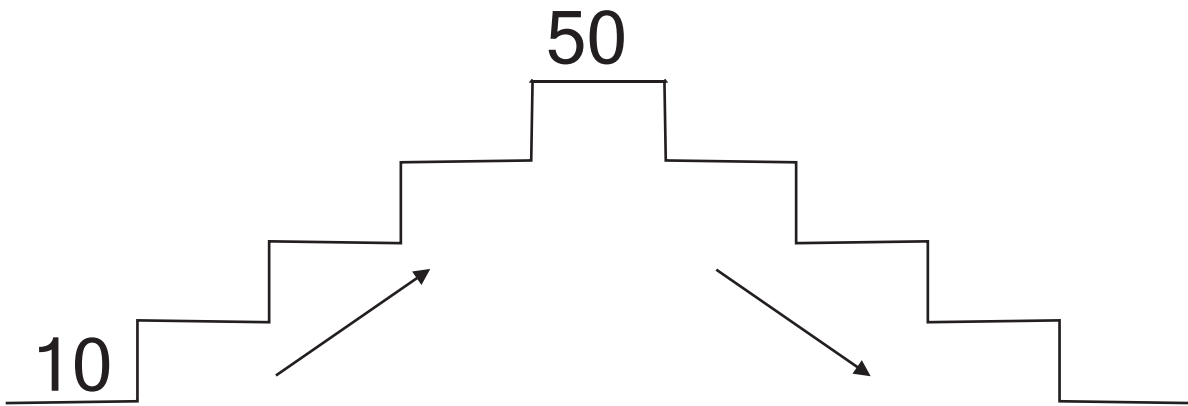


Μάθημα 33

1) Ανέβα 10 - 10 μέχρι το 50 και μετά κατέβα.



2) Γράψε τους αριθμούς που λείπουν κάθε φορά:

		36	
--	--	----	--

		50
--	--	----

	27	
--	----	--

21		
----	--	--

	45		
--	----	--	--

		31
--	--	----

	40	
--	----	--


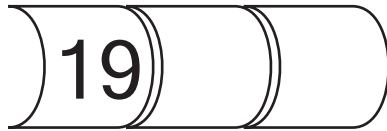

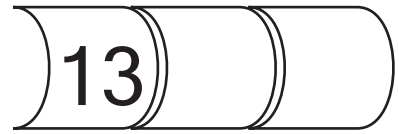


28		
----	--	--

	17	
--	----	--

3) Σκέψου και συμπλήρωσε τον πίνακα, όπως το παράδειγμα:

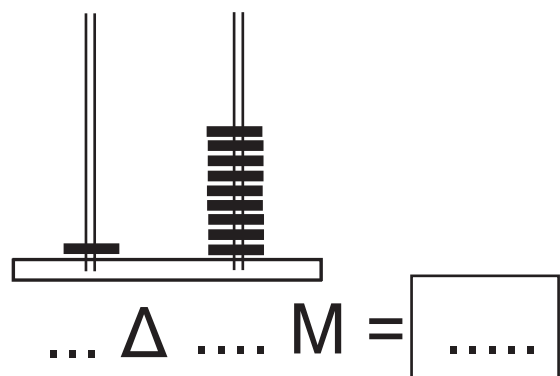
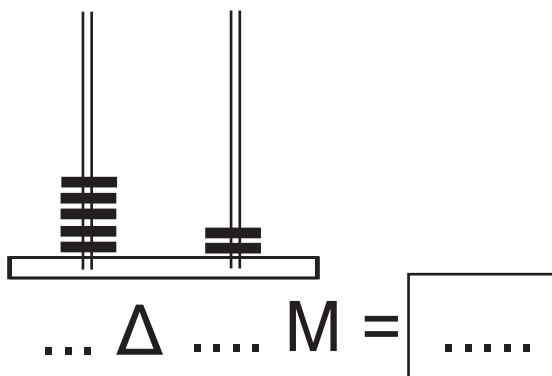
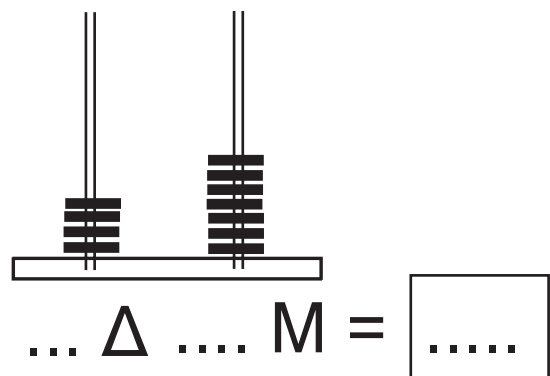
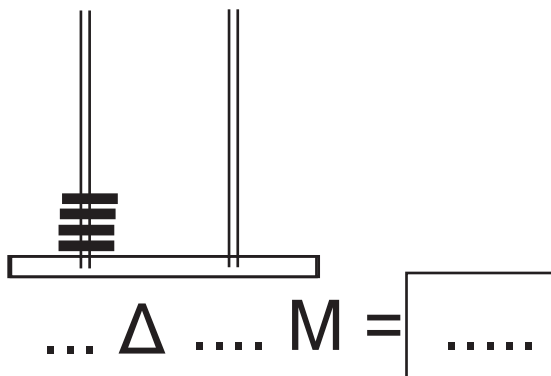
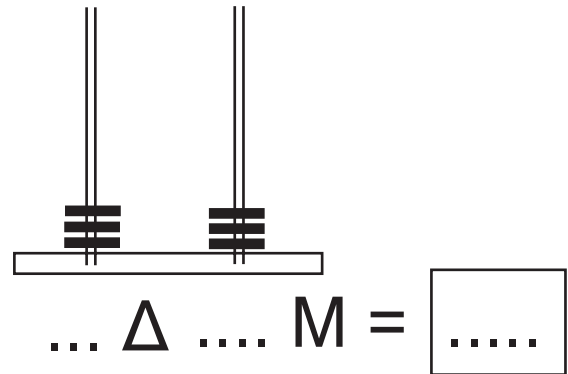
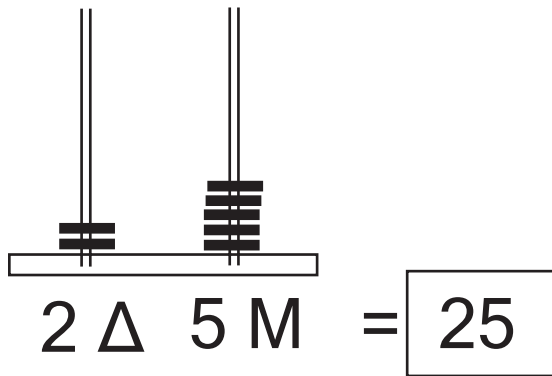
3 Δ	4 Μ	$10+10+10+4$	$30 + 4$	34
2 Δ	9 Μ			
4 Δ	8 Μ			
3 Δ	0 Μ			
1 Δ	5 Μ			
4 Δ	7 Μ			

4) Γράψε δίπλα σε κάθε αριθμό δύο μεγαλύτερους, όποιους θέλεις.



5) Ποιος αριθμός είναι;

Σκέψου όπως το παράδειγμα για να τον ανακαλύψεις.



Όνομα: _____