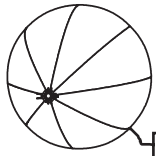


Μάθημα 38


1) Τι θα δώσεις για να αγοράσεις κάθε παιχνίδι;
 Να διαγράψεις όσα χρήματα δε χρειάζεσαι, όπως το παράδειγμα.



4 ευρώ



19 ευρώ



5 ευρώ



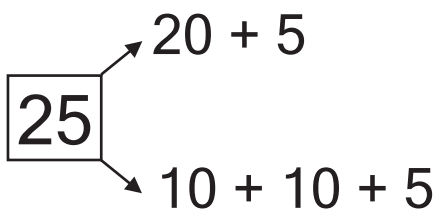
43 ευρώ



14 ευρώ



2) Ανάλυσε τους αριθμούς όπως το παράδειγμα:



3) Ποιος αριθμός λείπει;

$$4 + \dots = 7$$

$$6 + \dots = 7$$

$$5 + \dots = 7$$

$$3 + \dots = 7$$

$$3 + 4 + \dots = 9$$

$$6 + 0 + \dots = 9$$

$$2 + 2 + \dots = 9$$

$$3 + 2 + \dots = 9$$

$$3 + 1 + 2 + \dots = 10$$

$$2 + 1 + 2 + \dots = 10$$

$$2 + 2 + 2 + \dots = 10$$

$$3 + 1 + 3 + \dots = 10$$

$$40 + \dots = 50$$

$$20 + \dots = 50$$

$$10 + \dots = 50$$

$$30 + \dots = 50$$

$$\begin{array}{r} 6 \\ + \dots \\ \hline 8 \end{array}$$

$$\begin{array}{r} 5 \\ + \dots \\ \hline 9 \end{array}$$

$$\begin{array}{r} 3 \\ + \dots \\ \hline 10 \end{array}$$

$$\begin{array}{r} 4 \\ + \dots \\ \hline 7 \end{array}$$

$$\begin{array}{r} 2 \\ 2 \\ + \dots \\ \hline 8 \end{array}$$

$$\begin{array}{r} 5 \\ 1 \\ + \dots \\ \hline 9 \end{array}$$

$$\begin{array}{r} 2 \\ 3 \\ + \dots \\ \hline 7 \end{array}$$

$$\begin{array}{r} 5 \\ 4 \\ + \dots \\ \hline 10 \end{array}$$

$$\begin{array}{r} 2 \\ 1 \\ 2 \\ + \dots \\ \hline 6 \end{array}$$

$$\begin{array}{r} 3 \\ 2 \\ 0 \\ + \dots \\ \hline 8 \end{array}$$

$$\begin{array}{r} 5 \\ 1 \\ 1 \\ + \dots \\ \hline 10 \end{array}$$

$$\begin{array}{r} 2 \\ 3 \\ 1 \\ + \dots \\ \hline 9 \end{array}$$

Όνομα: _____