


Μάθημα 46



1) Βρες πόσο κάνουν ανεβαίνοντας ή κατεβαίνοντας 1 - 1

$5 + 2 = \dots\dots$

$8 - 2 = \dots\dots$

$6 + 3 = \dots\dots$

$9 - 4 = \dots\dots$

$4 + 2 = \dots\dots$

$17 + 2 = \dots\dots$

$7 - 3 = \dots\dots$

$16 - 2 = \dots\dots$

$5 + 4 = \dots\dots$

$18 + 1 = \dots\dots$

$8 - 5 = \dots\dots$

$19 - 5 = \dots\dots$

$7 + 2 = \dots\dots$

$12 + 4 = \dots\dots$

$9 - 6 = \dots\dots$

$17 - 4 = \dots\dots$

$13 + 3 = \dots\dots$

$18 - 3 = \dots\dots$

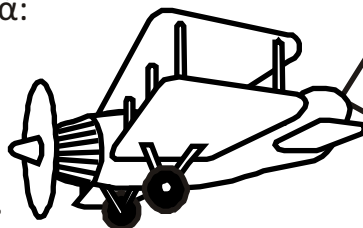
$11 + 5 = \dots\dots$

$19 - 3 = \dots\dots$

2) Λογάριασε τώρα πιο προσεκτικά:

$5 + 3 = \dots\dots$

$6 + 2 = \dots\dots$



Αν δυσκολευτείς,
κρύψε με το δαχτυλάκι σου
τις Δεκάδες.

Τι παρατηρείς;

$15 + 3 = \dots\dots$

$16 + 2 = \dots\dots$

$25 + 3 = \dots\dots$

$26 + 2 = \dots\dots$

$9 - 2 = \dots\dots$

$8 - 3 = \dots\dots$

$35 + 3 = \dots\dots$

$36 + 2 = \dots\dots$

$19 - 2 = \dots\dots$


$18 - 3 = \dots\dots$

$45 + 3 = \dots\dots$

$46 + 2 = \dots\dots$

$29 - 2 = \dots\dots$

$28 - 3 = \dots\dots$



$39 - 2 = \dots\dots$

$38 - 3 = \dots\dots$

$49 - 2 = \dots\dots$

$48 - 3 = \dots\dots$

3) Θυμήσου το προηγούμενο κόλπο και προσπάθησε να βρεις τι λείπει:

$5 + \dots\dots = 9$

$6 + \dots\dots = 9$

$15 + \dots\dots = 19$

$16 + \dots\dots = 19$

$9 - \dots\dots = 7$

$6 - \dots\dots = 2$

$19 - \dots\dots = 17$

$16 - \dots\dots = 12$

$4 + \dots\dots = 7$

$2 + \dots\dots = 8$

$14 + \dots\dots = 17$

$12 + \dots\dots = 18$

$8 - \dots\dots = 5$

$7 - \dots\dots = 5$

$18 - \dots\dots = 15$

$17 - \dots\dots = 15$

$3 + \dots\dots = 5$

$4 + \dots\dots = 6$

$13 + \dots\dots = 15$

$14 + \dots\dots = 16$

$7 - \dots\dots = 3$

$9 - \dots\dots = 4$

$17 - \dots\dots = 13$

$19 - \dots\dots = 14$

Όνομα: _____