
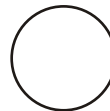







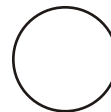
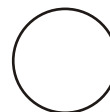
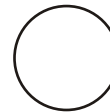
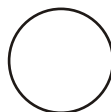


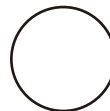
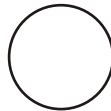




# Μάθημα 51

1) Ζωγράφισε τα νομίσματα ώστε να συμπληρώσεις το ποσό που γράφει πάνω σε κάθε κουμπάρα, όπως το παράδειγμα.



2) Λύσε τα προβλήματα.

Η Κατερίνα έχει 6 ευρώ και θέλει να αγοράσει μια κούκλα που κάνει 14 ευρώ.

Πόσα χρήματα χρειάζεται ακόμα;

Λογάριασε: \_\_\_\_\_

Απάντησε: \_\_\_\_\_



Η μητέρα είχε 20 ευρώ αλλά έδωσε 10 ευρώ για να αγοράσει κιμά και 8 ευρώ για να αγοράσει φρούτα.

Πόσα ρέστα πήρε;

Λογάριασε: \_\_\_\_\_

Απάντησε: \_\_\_\_\_



Όνομα: \_\_\_\_\_