



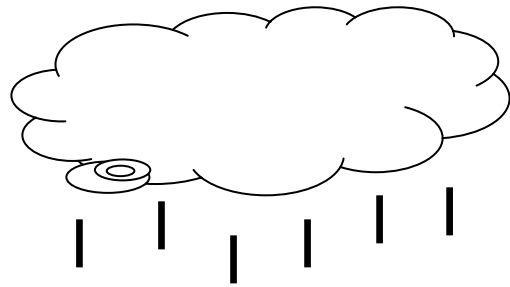
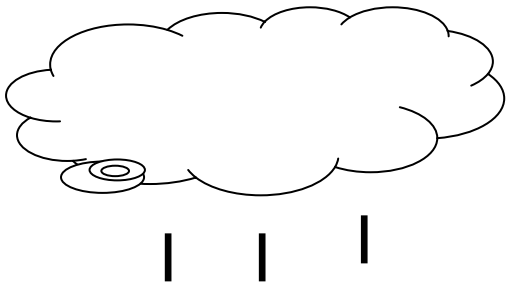


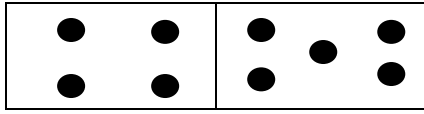
Ανάλυση και σύνθεση του 9

Όνομα: _____

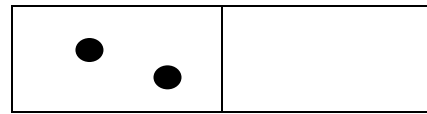
1. Βάζω ή βγάζω από κάθε συννεφάκι όσες γραμμούλες χρειάζεται για να έχουν όλα από 9



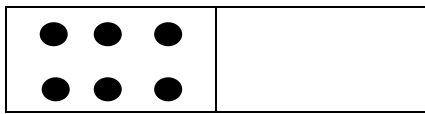
2. Συμπληρώνω ότι λείπει και ζωγραφίζω τα ντόμινο για να είναι όλα 9



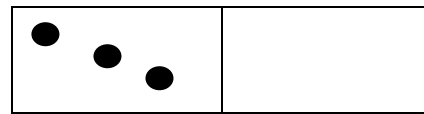
$$4 \text{ και } 5 = 9$$



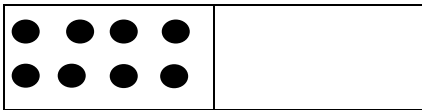
$$2 \text{ και } \underline{\quad\quad} = 9$$



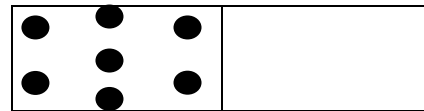
$$6 \text{ και } \underline{\quad\quad} = 9$$



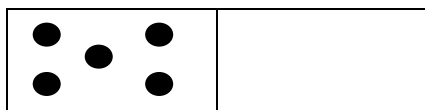
$$3 \text{ και } \underline{\quad\quad} = 9$$



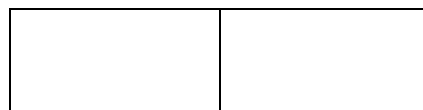
$$8 \text{ και } \underline{\quad\quad} = 9$$



$$7 \text{ και } \underline{\quad\quad} = 9$$



$$5 \text{ και } \underline{\quad\quad} = 9$$



$$0 \text{ και } \underline{\quad\quad} = 9$$